



Circle each group of 4.




How many groups of 4. are there? \_\_\_\_\_

Circle the groups. Fill in the blanks.

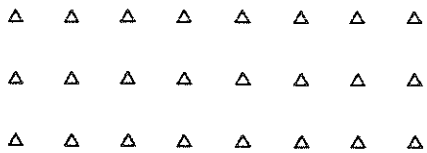
How many groups of 2? \_\_\_\_\_




How many groups of 2? \_\_\_\_\_



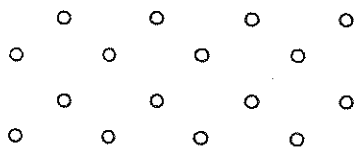
How many groups of 3? \_\_\_\_\_



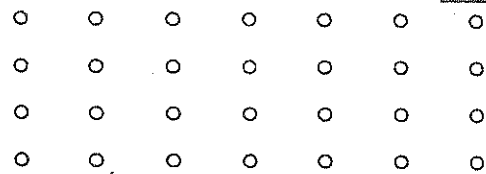
Circle groups of 3.  
How many groups? \_\_\_\_\_




Circle groups of 4.  
How many groups? \_\_\_\_\_



How many groups of 4? \_\_\_\_\_



How many groups of 5? \_\_\_\_\_



How many groups of 5? \_\_\_\_\_

