


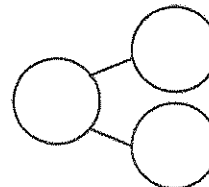
Name _____

Date _____

Circle 10 and subtract. Make a number bond.



1. $15 - 9 = \underline{\quad}$



Draw and circle 10. Subtract and make a number bond.

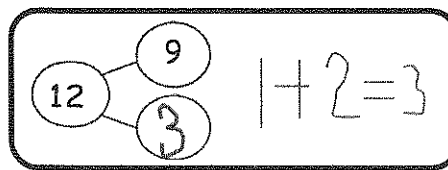
2. $14 - 9 = \underline{\quad}$

3. $12 - 9 = \underline{\quad}$

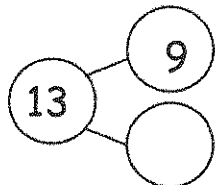
4. $13 - 9 = \underline{\quad}$

5. $16 - 9 = \underline{\quad}$

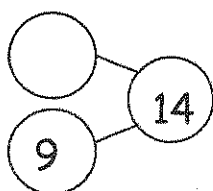
6. Complete the number bond, and write the number sentence that helped you.



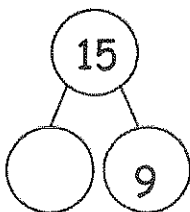
a.



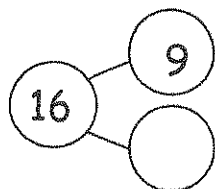
b.



c.



d.



7. Make the number bond that would come next, and write a number sentence that matches.