


Name _____



Hundred's Chart

1	2	3	4	5	6	7	8	9	10
11	12	13	14	15	16	17	18	19	20
21	22	23	24	25	26	27	28	29	30
31	32	33	34	35	36	37	38	39	40
41	42	43	44	45	46	47	48	49	50
51	52	53	54	55	56	57	58	59	60
61	62	63	64	65	66	67	68	69	70
71	72	73	74	75	76	77	78	79	80
81	82	83	84	85	86	87	88	89	90
91	92	93	94	95	96	97	98	99	100

Count by 2's from 0 to 100.
Circle each number that "counts by 2."

Count by 5's from 5 to 100.
Mark a slanted line on each number that "counts by 5."

Count by 10's from 10 to 100.
Mark an x on each number that "counts by 10."

Fill in the blanks.

2, 4, 6, _____, _____, _____, _____, _____, _____, 20

5, 10, 15, _____, _____, _____, _____, _____, _____, 50

10, 20, _____, _____, _____, _____, _____, _____, _____, 100


24, 26, 28, _____, _____, _____, _____, _____, _____, 40

50, 55, _____, _____, _____, _____, _____, _____, _____, 90

30, 40, _____, _____, _____, _____, _____, _____, _____, 100

68, 70, _____, _____, _____, _____, _____, _____, _____, 82

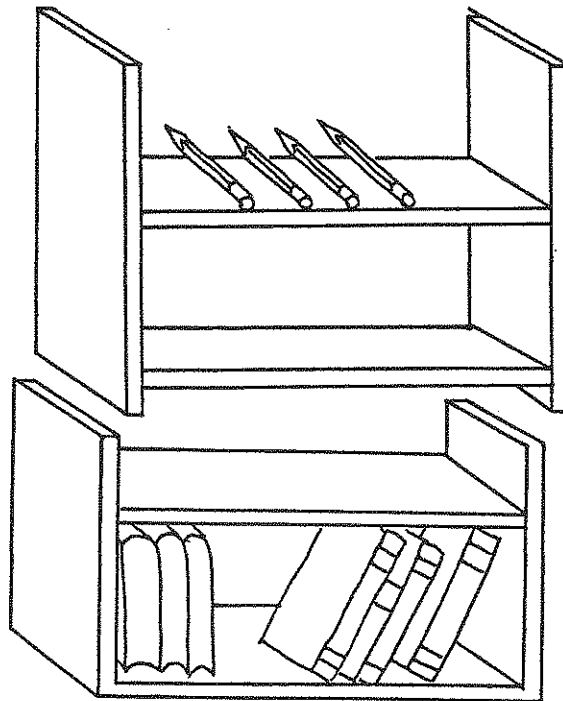
84, _____, _____, _____, 92, _____, _____, _____, _____, _____, 100



Top-Bottom

Name _____

The pencils are on the top shelf.



The books are on the bottom shelf.

Fill in the blanks.

What number is on top of the line? _____ 1
What number is on bottom of the line? _____ 2

Write the number 4 on the bottom of the line. _____
Write the number 3 on top of the line. _____

Top or bottom?

Wear a hat on _____ of the head.
Wear shoes at the _____ of the body.
A basement is at the _____ of a house.
A roof is at the _____ of a house.

Shade in the top
of the box.

