


Name _____


Date _____

1. Use the disks to complete the blanks in the equations.



3×3 ones = _____ ones

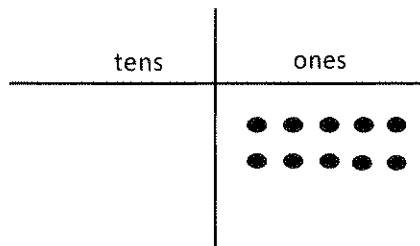
$3 \times 3 =$ _____



3×3 tens = _____ tens

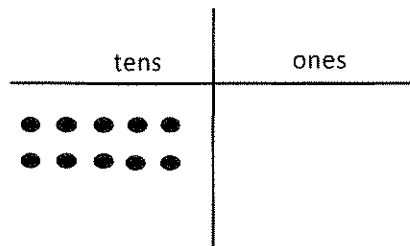
$30 \times 3 =$ _____

2. Use the chart to complete the blanks in the equations.



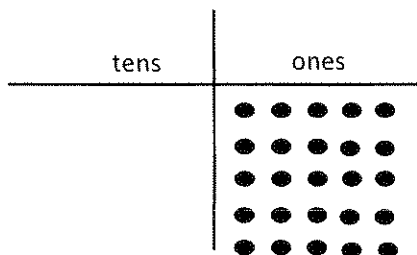
a. 2×5 ones = _____ ones

$2 \times 5 =$ _____



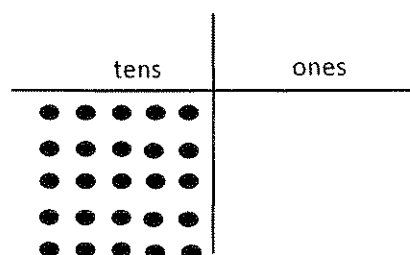
b. 2×5 tens = _____ tens

$2 \times 50 =$ _____



c. 5×5 ones = _____ ones

$5 \times 5 =$ _____



d. 5×5 tens = _____ tens

$5 \times 50 =$ _____

3. Match.

6×2

120

6 tens \times 2

21

7×3

12

7 tens \times 3

270

70×5

210

3×90

350

4. Each classroom has 30 desks. What is the total number of desks in 8 classrooms? Model with a tape diagram.